

Modified Enlarged 36pt
OXFORD CAMBRIDGE AND RSA EXAMINATIONS

Monday 10 June 2019 – Morning

GCSE (9–1) Food Preparation and Nutrition

J309/01 Food preparation and nutrition

Time allowed: 1 hour 30 minutes
plus your additional time allowance

**No additional material is required for this
Question Paper.**

Please write clearly in black ink.

Centre number

--	--	--	--	--

Candidate number

--	--	--	--

First name(s) _____

Last name _____

READ INSTRUCTIONS OVERLEAF



INSTRUCTIONS

Use black ink.

Answer ALL the questions.

Write your answer to each question in the space provided. If additional space is required, use the lined page(s) at the end of this booklet. The question number(s) must be clearly shown.

INFORMATION

The total mark for this paper is 100.

The marks for each question are shown in brackets [].

Quality of extended responses will be assessed in the questions marked with an asterisk (*).

Answer ALL the questions.

1 Meat is a good source of protein.

(a) (i) State TWO functions of protein in the diet.

1 _____

2 _____

[2]

(ii) Explain ONE difference between high biological value protein (HBV) and low biological value protein (LBV).

_____ **[2]**

(b) Beef contains micronutrients.

**Complete the table below to show TWO micronutrients in beef.
Give ONE different function for each micronutrient. [4]**

Micronutrient	Function of the micronutrient

(c) Meat can be put into a marinade before it is cooked.

Give TWO reasons for putting meat into a marinade before it is cooked.

1 _____

2 _____

[2]

(d) Explain ONE change that takes place when meat is cooked.

[2]

2* Many consumers choose to buy Fairtrade[®] food products.

Explain how the production of Fairtrade products benefits the food producers and their workers, the local community and the environment. [12]

[illegible]

- 3 FIG. 1 shows the ingredients used in a Victoria sponge made by the creaming method.**

FIG. 1

**150 g self raising flour
150 g caster sugar
150 g butter
3 eggs**

- (a) Explain scientifically what happens when the butter and sugar are creamed together.**

[2]

(b) Explain scientifically what happens to the sponge mixture when it is baked in the oven.

[4]

(c) State TWO qualities of a successful Victoria sponge.

1 _____

2 _____

[2]

(d) Victoria sponge cakes are often decorated to make them look more attractive.

Give THREE ways the Victoria sponge cake could be decorated.

1 _____

2 _____

3 _____

[3]

4 Some complex carbohydrates are a good source of energy.

(a) (i) Name THREE foods which are a good source of complex carbohydrates.

1 _____

2 _____

3 _____

[3]

(ii) Explain why some complex carbohydrates are a good source of energy.

_____ **[2]**

(b) Explain what is meant by the term energy balance.

[2]

(c) People have different energy needs.

(i) State what is meant by the term BMR (Basal Metabolic Rate).

[1]

(ii) State what is meant by the term PAL (Physical Activity Level).

[1]

5 Consumers throw away millions of tonnes of food a year.

(a) One way to reduce food wastage is to use leftover food in a new dish.

Complete the table below to suggest THREE different dishes that could be made using the leftover food. An example has been completed using the grated cheese. [3]

Leftover food	Dish
Grated cheese	Cheese scones
Mashed potato	
Cooked peas and green beans	
Cooked chicken	

**(b)*Other than using leftover food,
explain ways consumers could
reduce the amount of their food
waste. [8]**

6 FIG. 2 shows the meals eaten by a vegetarian teenage girl for one day.

FIG. 2

Breakfast	White toast with butter Orange squash
Lunch	Cheddar cheese sandwich (white bread and butter) Packet of crisps Shortbread biscuit Orange fizzy drink
Evening meal	Shop-bought cheese and tomato pizza Chips Doughnut
Other snacks and drinks	Packet of crisps Orange fizzy drink 3 Shortbread biscuits

(a) State TWO nutrients that are lacking in this diet for a teenage girl.

1 _____

2 _____

[2]

(b) Give THREE changes which could be made to the diet so that it meets the current government nutritional advice.

1 _____

2 _____

3 _____

[3]

(c) Give THREE reasons why some teenage girls may choose to follow a vegetarian diet.

1 _____

2 _____

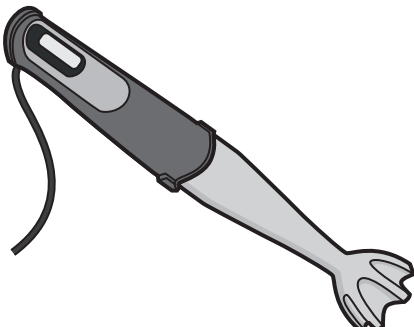


3 _____

[3]

7 A variety of electrical equipment can be used when preparing and cooking food.

(a) Complete the table below to give the name of each piece of equipment.

[3]

Equipment	Name of the equipment
	
	
	

(b) Give FOUR reasons why steaming is a popular method of cooking food.

1 _____

2 _____

3 _____

4 _____

[4]

(c) Explain TWO factors that could influence the way consumers choose to cook food.

1 _____

2 _____

[4]

8 A wide range of milks and alternative milk products are available.

(a) Complete the table below to identify ONE different type of milk suitable for each of the consumers. [3]

Consumer	Suitable type of milk
Two year old child	
Lactose intolerant adult	
Vegan	

(b) Yoghurt is made from milk.

Describe how milk is made into yoghurt.

[4]

(c) Give ONE reason a use-by date is on a yoghurt container.

[1]

9 Since 1996, the number of people diagnosed with diabetes in the UK has more than doubled from 1.4 million to almost 3.5 million.

(a) Explain the difference between type 1 diabetes and type 2 diabetes.

[2]

(b)*Explain the dietary advice that you would give to a person who has type 2 diabetes. [6]

(c) There has been an increase in the number of children who have tooth decay.

Explain how tooth decay is caused.

[2]

10 (a) Temperature control is important when cooking and serving food.

(i) State the correct temperature for keeping food hot in a school canteen.

_____ °C [1]

(ii) State the correct temperature to which a shepherd's pie should be reheated.

_____ °C [1]

(b) If food is not stored correctly bacteria will grow.

State THREE conditions bacteria need to grow.

1 _____

2 _____

3 _____

[3]

(c) Give THREE signs of food spoilage.

1 _____

2 _____

3 _____

[3]

END OF QUESTION PAPER

ADDITIONAL ANSWER SPACE

If additional space is required, you should use the following lined page(s). The question number(s) must be clearly shown in the margin(s).

[illegible]

[illegible]

[illegible]



Copyright Information

OCR is committed to seeking permission to reproduce all third-party content that it uses in its assessment materials. OCR has attempted to identify and contact all copyright holders whose work is used in this paper. To avoid the issue of disclosure of answer-related information to candidates, all copyright acknowledgements are reproduced in the OCR Copyright Acknowledgements Booklet. This is produced for each series of examinations and is freely available to download from our public website (www.ocr.org.uk) after the live examination series.

If OCR has unwittingly failed to correctly acknowledge or clear any third-party content in this assessment material, OCR will be happy to correct its mistake at the earliest possible opportunity.

For queries or further information please contact The OCR Copyright Team, The Triangle Building, Shaftesbury Road, Cambridge CB2 8EA.

OCR is part of the Cambridge Assessment Group; Cambridge Assessment is the brand name of University of Cambridge Local Examinations Syndicate (UCLES), which is itself a department of the University of Cambridge.